

**GOOD TIMES INFANT SCHOOL KAWAALA
SET II REVISION WORK 2020**

PRIMARY THREE LITERACY 1 A

NAME _____

STREAM _____

1. What do we call the study of living things and non- living things?

2. Identify one wild animal

3. Why should one wash hands before eating?

4. What are non- living things?

5. Which sense organ helps one to see?

6. Why is a cat considered to be a living thing?

7. Apart from fish, mention any one animal that lives in water.

8. Of what importance are wings to a bird?

9. In the space below, draw one item made out of banana fibres



10. Mention any one food that contains proteins

11. Which insect provides honey?

12. What is the use of a dog in a home?

13. Identify any one container used to keep water.

14. Apart from rabbits, which domestic animal does not provide milk to man.

15. Give any one way, how animals are dangerous to man

16. Give any one way of caring for the body.

17. Name any one family basic need

18. Name any one milk product.

19. What do we call a young cow?

20. Name one fruit that we eat.

21. What is the use of a broom at school?

22. Why do we boil water for drinking?

23. What name is given to the natural home of a living organism?

24. Of what importance is water to soil?

25. How are camels, donkeys and horses useful to man?

26. What is humus?

27. Identify the main natural source of light.

28. Apart from measles, list down any one immunisable disease.

29. What is soil profile?

30. From which domestic animal is wool obtained?

31. Mention the best layer for crop growing.

32. Identify any one soil living organism

33. Why is a lion referred to a wild animal?

34. What is air?

35. Give any one use of the sun to man.

36. Identify any one animal kept at home.

37. Give any one element of a clean home.

38. In which season is harvesting done?

39. Mention any one way of keeping our food safe.

40. Name any one source of food.

SECTION B

41.(a) identify the two major groups of living things

(b) List down any two characteristics of living things

42.(a) Name any two common foods.

(i) _____ (ii) _____

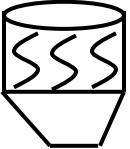


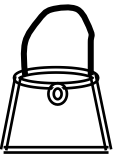
(b) Give two reasons why people eat food.

43.(a) Give two reasons why people give first Aid.

(b) Mention two items used while giving first Aid.

(i) _____ (ii) _____

44. Name these items made out of hides.

			
---	---	--	---

45.(a) What are domestic animals.

(b) Mention two domestic animals that provide milk to people.

(i) _____ (ii) _____

(c) Apart from Milk, identify one product from domestic animals.

46. Draw these wild animals.

elephant	lion	snake	monkey

48(a) Mention any two sources of water

(i) _____ (ii) _____

(b) Give any two uses of water to man

49. Match correctly.

Animal

meat got from it

cow

mutton

pig

beef

rabbit

pork

sheep

rabbit pie.

cow _____

pig _____

rabbit _____

sheep _____

50. How are spiracles useful to insects?

(b) Write down any two useful insects

(i) _____ (ii) _____

(c) State one danger of insects to people.

51 (a) Mention any two examples of plants

(b) Name two places where plants grow

(i) _____ (ii) _____

52. What is environment?

(b) Identify any three living things found in our environment

(i) _____ (ii) _____





(iii) _____

53. (a) of what use are dustbins in our school compounds.

(b) Outline any two activities done to keep our school compound clean.

(c) Name one thing that is used for cleaning the compound.

54. Name these things we use to clean our bodies

55 Which part of the plant is eaten?

(a) Beans _____

(b) cassava _____

(c) cabbages _____

(d) sugarcane _____